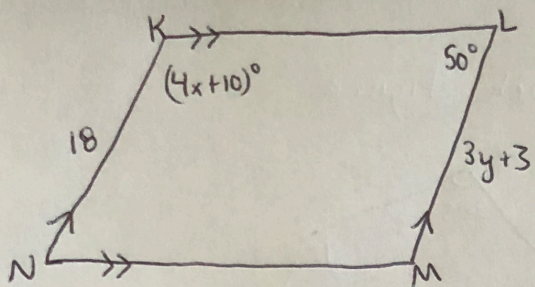


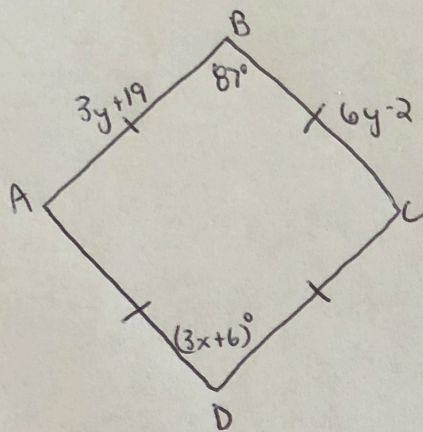
Unit 7- Polygons COVID-19 Review

③ Find x, y + $m\angle M$



$x =$
 $y =$
 $m\angle M =$

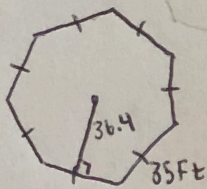
④ Find x, y + CD



$x =$
 $y =$
 $CD =$

⑤ Find the area + perimeter of the shapes.

a)



b) Vertices: $(-4, 2), (1, -1), (2, 2)$